

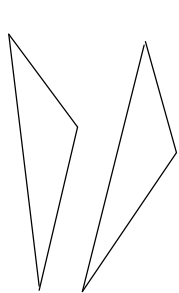
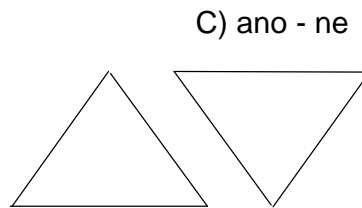
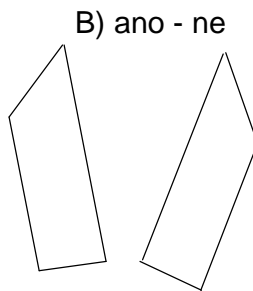
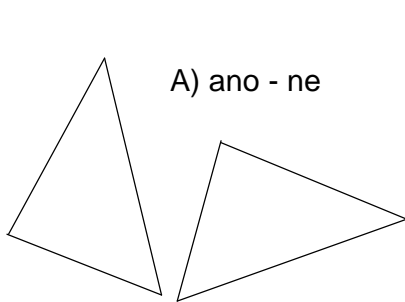
1/ Načrtni, jak vypadá :

různoběžka :

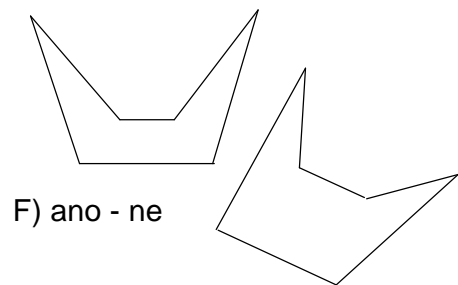
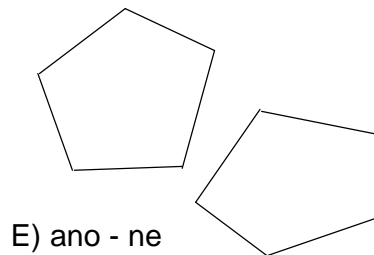
rovnoběžka :

mimoběžka :

2/ Jsou tyto útvary shodné?



D) ano - ne



3/ Převeď jednotky :

5 km = m

48 cm = mm

300 cm = dm

1800 m = km

25 dm = mm

50 dm = cm