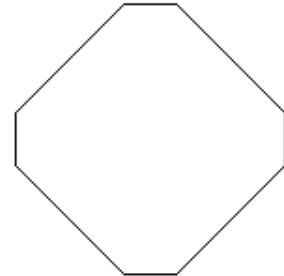
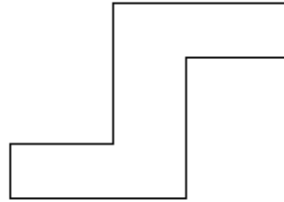

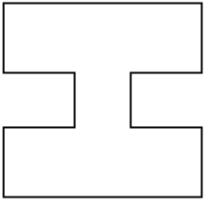



1/ Vyznač středy u těchto útvarů :



2/ Sestroj rovnoběžku s přímkou p tak, aby byly od sebe vzdáleny 4cm :



3/ Vybarvi všechny rovnoběžníky :

